


My name is: _____

It's a hot sunny day - You're going off to the beach.
What will you need to take to protect yourself from the sun?

My Sun Survival Kit

My name is: _____

Draw a tree to show the difference in seasons.



Write the answers.

Month

Season

When do you start P4?

When is Christmas?

When is Easter?

When is your birthday?

Describe the weather during these occasions.

Summer holidays?

At Christmas?

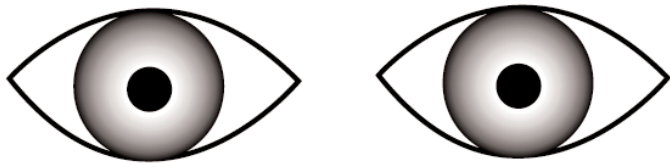
My birthday?

Year 3 Worksheet 1 - Sun & Health

My name is: _____

MY COLOURING

I have _____ eyes.



I have _____ hair.



I have _____ skin.


I have _____ freckles.



"Parts of the Eye"

My name is: _____

Look at your neighbour's eyes. What colour are they?
Do you know all of these parts of the eye?



iris

pupil

white

eyelashes

eyebrow

Year 3 Worksheet 1 - Sun Protection

My name is: _____



We used _____

It let _____
through.



We used _____

It is too _____



We used _____

It is _____

and _____



We used _____

It let _____
through.









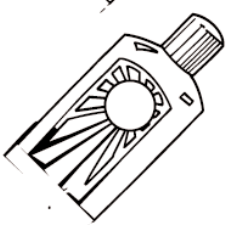



We used _____

It is too _____

Year 3 Worksheet 2 - Sun Protection

My name is: _____

Write the numbers on the sunscreen bottles in order.

<input type="text" value="10"/>	<input type="text" value="2"/>	<input type="text" value="8"/>	<input type="text" value="35"/>	<input type="text" value="25"/>	
	<input type="text" value="30"/>	<input type="text" value="20"/>	<input type="text" value="4"/>	<input type="text" value="15"/>	<input type="text" value="6"/>
					
					

Write the odd numbers

Write the even numbers

What is the lowest number?

What is the highest number?

What is the difference between them?

Which one will protect you most?